

*Third Edition*

---

RADIATIVE HEAT TRANSFER

---

**Michael F. Modest**  
*University of California at Merced*

SOLUTION MANUAL

**Academic Press**

New York San Francisco London

---

# PREFACE

---

This manual/web page contains the solutions to many (but not all) of the problems that are given at the end of each chapter, in particular for problems on topics that are commonly covered in a first (or, at least, second) graduate course on radiative heat transfer. Thus, solutions to problems of Chapters 1 through 6, 9 through 11, 13, 14 and 18 are almost complete; for other chapters (7, 15, 16, 19) only around half of solutions are given, for problems on the more basic aspects covered in that chapter. Quite a few solutions, together with Fortran90 codes, are also given for Chapter 20, not so much intended as homework solutions, but perhaps useful for semester projects and/or to aid the researcher to write his/her first Monte Carlo code. At this date no problem solutions are provided for the remaining chapters. However, it is the intent to periodically update this web-based solution manual, at which time additional solutions may be posted.

Most solutions have been checked, and some have been rechecked. Still, only a major miracle could have prevented me from making an occasional error or overlooking an occasional typo. I would appreciate it very much if any such errors in the manual (or, for that matter, in the text) would be reported to me. In addition, for the benefit of other instructors who will receive future editions of this manual, any reasonably written up solutions to presently unsolved problems would also be appreciated.

This manual is posted as a pdf-file with hyperreferences enabled, including a Table of Contents and a Bookmark column listing all chapters and problems. This enables the reader to immediately jump back and forth within the document to locally referenced items (chapters, problems, figures, equations). References to equations, figures, etc., in the book itself can, of course, not be reached in this way. Users of *Adobe Acrobat*<sup>®</sup> can easily assemble individual problem set solutions from this manual. To make this also possible for instructors with access to only the shareware postscript/pdf viewer *Ghostview*<sup>®</sup>, each individual problem is started at the top of a new page.

*State College, PA  
December 2002*

*Michael F. Modest  
Department of Mechanical Engineering  
The Pennsylvania State University  
University Park, PA 16802  
e-mail: mfm6@psu.edu*

---

# CONTENTS

---

<b>Chapter 1</b>	<b>2</b>
Problem 1.1	2
Problem 1.2	3
Problem 1.3	4
Problem 1.4	5
Problem 1.5	6
Problem 1.6	7
Problem 1.7	8
Problem 1.8	9
Problem 1.9	10
Problem 1.10	11
Problem 1.11	12
Problem 1.12	13
Problem 1.13	15
Problem 1.14	16
Problem 1.15	17
<b>Chapter 2</b>	<b>19</b>
Problem 2.1	19
Problem 2.2	20
Problem 2.3	22
Problem 2.4	23
Problem 2.5	24
Problem 2.6	25
<b>Chapter 3</b>	<b>27</b>
Problem 3.1	27
Problem 3.2	28
Problem 3.3	29
Problem 3.4	30
Problem 3.5	31
Problem 3.6	33
Problem 3.7	34
Problem 3.8	35
Problem 3.9	36
Problem 3.10	37
Problem 3.11	38
Problem 3.12	39
Problem 3.13	40
Problem 3.14	41
Problem 3.15	42
Problem 3.16	43
Problem 3.17	44
Problem 3.18	45
Problem 3.19	46

Problem 3.20	47
Problem 3.21	48
Problem 3.22	49
Problem 3.23	50
Problem 3.24	52
Problem 3.25	53
Problem 3.26	54
Problem 3.27	55
Problem 3.28	56
Problem 3.29	57
Problem 3.30	58
Problem 3.31	59
Problem 3.32	60
Problem 3.33	61
Problem 3.34	62
Problem 3.35	63
Problem 3.36	65
<b>Chapter 4</b>	<b>66</b>
Problem 4.1	66
Problem 4.2	68
Problem 4.3	69
Problem 4.4	70
Problem 4.5	72
Problem 4.6	73
Problem 4.7	74
Problem 4.8	75
Problem 4.9	76
Problem 4.10	77
Problem 4.11	78
Problem 4.12	79
Problem 4.13	80
Problem 4.14	81
Problem 4.15	82
Problem 4.16	83
Problem 4.17	84
Problem 4.18	85
Problem 4.19	87
Problem 4.20	88
Problem 4.21	89
Problem 4.22	90
Problem 4.23	92
Problem 4.24	93
Problem 4.25	94
Problem 4.26	96
<b>Chapter 5</b>	<b>100</b>
Problem 5.1	100
Problem 5.2	101
Problem 5.3	103
Problem 5.4	105
Problem 5.5	106
Problem 5.6	107
Problem 5.7	108
Problem 5.8	109

Problem 5.9	110
Problem 5.10	112
Problem 5.11	113
Problem 5.12	114
Problem 5.13	115
Problem 5.14	118
Problem 5.15	120
Problem 5.16	122
Problem 5.17	124
Problem 5.18	125
Problem 5.19	126
Problem 5.20	127
Problem 5.21	129
Problem 5.22	130
Problem 5.23	131
Problem 5.24	132
Problem 5.25	134
Problem 5.26	135
Problem 5.27	136
Problem 5.28	137
Problem 5.29	139
Problem 5.30	141
Problem 5.31	143
Problem 5.32	146
Problem 5.33	154
Problem 5.34	155
Problem 5.35	159
Problem 5.36	160
Problem 5.37	161
Problem 5.38	164
Problem 5.39	165
Problem 5.40	166
<b>Chapter 6</b>	<b>168</b>
Problem 6.1	168
Problem 6.2	169
Problem 6.3	170
Problem 6.4	172
Problem 6.5	174
Problem 6.6	176
Problem 6.7	178
Problem 6.8	179
Problem 6.9	180
Problem 6.10	182
Problem 6.11	183
Problem 6.12	184
Problem 6.13	185
Problem 6.14	187
Problem 6.15	188
Problem 6.16	189
Problem 6.17	191
Problem 6.18	192
Problem 6.19	193
Problem 6.21	195
Problem 6.22	198

Problem 6.24	200
Problem 6.26	202
Problem 6.27	203
Problem 6.29	205
Problem 6.30	208
Problem 6.31	210
Problem 6.34	212
Problem 6.35	213
<b>Chapter 7</b>	<b>214</b>
Problem 7.1	214
Problem 7.2	216
Problem 7.5	218
Problem 7.6	219
Problem 7.8	221
Problem 7.10	224
Problem 7.11	225
Problem 7.13	227
Problem 7.14	232
Problem 7.15	234
Problem 7.16	237
<b>Chapter 8</b>	<b>241</b>
Problem 8.1	241
Problem 8.2	242
Problem 8.3	243
Problem 8.4	245
Problem 8.5	246
Problem 8.6	247
Problem 8.7	248
Problem 8.8	249
Problem 8.9	251
Problem 8.10	254
Problem 8.14	255
Problem 8.15	260
<b>Chapter 9</b>	<b>265</b>
Problem 9.1	265
<b>Chapter 10</b>	<b>267</b>
Problem 10.1	267
Problem 10.2	269
Problem 10.3	270
Problem 10.4	272
Problem 10.5	273
Problem 10.6	275
Problem 10.7	276
Problem 10.8	278
Problem 10.9	279
Problem 10.10	280
Problem 10.11	281
Problem 10.12	283
Problem 10.13	285
Problem 10.14	287
Problem 10.15	288

<b>Chapter 11</b>	<b>289</b>
Problem 11.1	289
Problem 11.2	290
Problem 11.3	291
Problem 11.4	292
Problem 11.5	293
Problem 11.6	294
Problem 11.7	295
Problem 11.8	296
Problem 11.9	297
Problem 11.10	298
Problem 11.11	299
Problem 11.12	300
Problem 11.13	301
Problem 11.14	302
Problem 11.15	303
Problem 11.16	304
Problem 11.17	305
Problem 11.18	306
Problem 11.19	307
Problem 11.20	309
Problem 11.21	310
Problem 11.22	311
Problem 11.23	313
Problem 11.24	314
Problem 11.25	316
Problem 11.26	317
Problem 11.27	318
Problem 11.28	319
Problem 11.29	320
Problem 11.30	321
Problem 11.31	323
Problem 11.32	324
Problem 11.33	325
Problem 11.34	327
Problem 11.35	328
Problem 11.37	329
Problem 11.38	330
Problem 11.39	331
Problem 11.40	332
Problem 11.41	334
Problem 11.42	337
<b>Chapter 12</b>	<b>339</b>
Problem 12.1	339
Problem 12.2	340
Problem 12.3	341
Problem 12.4	342
Problem 12.5	343
Problem 12.6	344
Problem 12.7	345
Problem 12.8	346
Problem 12.9	347
Problem 12.10	348
Problem 12.11	349

Problem 12.13	350
Problem 12.14	351
Problem 12.15	352
Problem 12.16	353
Problem 12.17	354
Problem 12.18	355
Problem 12.19	356
Problem 12.20	358
Problem 12.21	359
<b>Chapter 14</b>	<b>360</b>
Problem 14.1	360
Problem 14.2	361
Problem 14.3	362
Problem 14.4	364
Problem 14.5	366
Problem 14.6	367
Problem 14.7	368
Problem 14.8	369
Problem 14.9	370
Problem 14.10	371
Problem 14.11	372
Problem 14.12	373
Problem 14.13	374
Problem 14.14	376
<b>Chapter 15</b>	<b>377</b>
Problem 15.1	377
Problem 15.2	378
Problem 15.3	379
Problem 15.4	380
Problem 15.5	382
Problem 15.6	383
Problem 15.7	384
Problem 15.8	386
Problem 15.9	387
Problem 15.10	388
Problem 15.11	390
Problem 15.12	392
Problem 15.13	394
Problem 15.14	396
Problem 15.15	397
Problem 15.16	399
Problem 15.18	401
Problem 15.19	403
<b>Chapter 16</b>	<b>405</b>
Problem 16.1	405
Problem 16.2	406
Problem 16.3	407
Problem 16.4	408
Problem 16.5	410
Problem 16.6	412
Problem 16.7	413
Problem 16.8	415



Problem 16.9	417
Problem 16.10	419
Problem 16.11	420
Problem 16.12	421
Problem 16.13	423
Problem 16.14	424
Problem 16.15	426
Problem 16.18	428
<b>Chapter 17</b>	<b>429</b>
Problem 17.1	429
Problem 17.2	430
Problem 17.3	431
Problem 17.4	432
Problem 17.5	434
Problem 17.6	436
Problem 17.7	438
Problem 17.8	439
Problem 17.9	441
Problem 17.10	443
<b>Chapter 19</b>	<b>445</b>
Problem 19.1	445
Problem 19.2	447
Problem 19.3	448
Problem 19.4	449
Problem 19.5	450
Problem 19.6	451
Problem 19.7	452
<b>Chapter 20</b>	<b>454</b>
Problem 20.1	454
Problem 20.2	455
Problem 20.3	456
Problem 20.4	457
Problem 20.5	459
Problem 20.7	464
Problem 20.8	466
Problem 20.9	468
Problem 20.10	469
Problem 20.11	470
Problem 20.15	472
Problem 20.20	474
<b>Chapter 21</b>	<b>477</b>
Problem 21.1	477
Problem 21.8	479

---

# CHAPTER 1

---

- 1.1 Solar energy impinging on the outer layer of earth's atmosphere (usually called "solar constant") has been measured as  $1367 \text{ W/m}^2$ . What is the solar constant on Mars? (Distance earth to sun =  $1.496 \times 10^{11} \text{ m}$ , Mars to sun =  $2.28 \times 10^{11} \text{ m}$ ).

**Solution**

The total energy emitted from the sun  $Q = 4\pi R_S^2 \sigma T_{\text{sun}}^4$  goes equally into all directions, so that

$$q_{\text{sc}}(R) = Q/4\pi R^2 = \sigma T_{\text{sun}}^4 \left(\frac{R_S}{R}\right)^2$$
$$\frac{q_{\text{sc, mars}}}{q_{\text{sc, earth}}} = \left(\frac{R_S}{R_M}\right)^2 / \left(\frac{R_S}{R_E}\right)^2 = \left(\frac{R_E}{R_M}\right)^2 = \left(\frac{1.496 \times 10^{11}}{2.28 \times 10^{11}}\right)^2 = 0.4305$$

$$q_{\text{sc, mars}} = 0.4305 \times 1367 = 588 \text{ W/m}^2$$

---

- 1.2 Assuming earth to be a blackbody, what would be its average temperature if there was no internal heating from the core of earth?

**Solution**

Without internal heating an energy balance for earth gives

$$\begin{aligned}Q_{\text{absorbed}} &= Q_{\text{emitted}} \\Q_{\text{abs}} &= q_{\text{sol}} \times A_{\text{proj}} = q_{\text{sol}} \pi R_E^2 \\Q_{\text{em}} &= \sigma T_E^4 A = 4\pi R_E^2 \sigma T_E^4\end{aligned}$$

Thus

$$T_E = \left( \frac{q_{\text{sol}}}{4\sigma} \right)^{1/4} = \left( \frac{1367 \text{ W/m}^2}{4 \times 5.670 \times 10^{-8} \text{ W/m}^2 \text{K}^4} \right)^{1/4}$$

$$T_E = 279 \text{ K} = 6^\circ \text{C}$$

---

- 1.3 Assuming earth to be a black sphere with a surface temperature of 300 K, what must earth's internal heat generation be in order to maintain that temperature (neglect radiation from the stars, but not the sun) (radius of the earth  $R_E = 6.37 \times 10^6$  m).

**Solution**

Performing an energy balance on earth:

$$\begin{aligned}\dot{Q} &= Q_{\text{emitted}} - Q_{\text{absorbed}} = \sigma T_E^4 A - q_{\text{sol}} A_{\text{proj}} \\ &= 4\pi R_E^2 \sigma T_E^4 - q_{\text{sol}} \pi R_E^2 = \pi R_E^2 (4\sigma T_E^4 - q_{\text{sol}}) \\ &= \pi \times (6.37 \times 10^6 \text{ m})^2 \left[ 4 \times 5.670 \times 10^{-8} \frac{\text{W}}{\text{m}^2 \text{K}^4} \times 300^4 \text{ K}^4 - 1367 \frac{\text{W}}{\text{m}^2} \right]\end{aligned}$$

$$\boxed{\dot{Q} = 6.00 \times 10^{16} \text{ W}}$$

---

- 1.4 To estimate the diameter of the sun, one may use solar radiation data. The solar energy impinging onto the earth's atmosphere (called the "solar constant") has been measured as  $1367 \text{ W/m}^2$ . Assuming that the sun may be approximated to have a black surface with an effective temperature of  $5777 \text{ K}$ , estimate the diameter of the sun (distance sun to earth  $S_{ES} \approx 1.496 \times 10^{11} \text{ m}$ ).

**Solution**

The sun's energy travels equally into all directions. Thus, on a spherical "shell" around the sun (such that earth's orbit lies on that shell): total energy leaving sun

$$Q_{\text{sun}} = q_{\text{sol}} \times 4\pi S_{ES}^2 = \sigma T_{\text{sun}}^4 4\pi R_S^2.$$

Thus

$$\begin{aligned} R_S &= S_{ES} \left( \frac{q_{\text{sol}}}{\sigma T_{\text{sun}}^4} \right)^{1/2} \\ &= 1.496 \times 10^{11} \text{ m} \left( \frac{1367 \text{ W/m}^2}{5.670 \times 10^{-8} \times 5777^4 \text{ W/m}^2} \right)^{1/2} \end{aligned}$$

$$\boxed{R_S = 6.96 \times 10^8 \text{ m}}$$


---

- 1.5 Solar energy impinging on the outer layer of earth's atmosphere (usually called "solar constant") has been measured as  $1367 \text{ W/m}^2$ . Assuming the sun may be approximated as having a surface that behaves like a blackbody, estimate its effective surface temperature. (Distance sun to earth  $S_{ES} \approx 1.496 \times 10^{11} \text{ m}$ , radius of sun  $R_S \approx 6.96 \times 10^8 \text{ m}$ ).

**Solution**

The sun's energy travels equally into all directions. Thus, on a spherical "shell" around the sun (such that the earth's orbit lies on that shell): total energy leaving sun

$$Q_{\text{sun}} = q_{\text{sol}} \times 4\pi S_{ES}^2 = \sigma T_{\text{sun}}^2 4\pi R_S^2.$$

Thus

$$\begin{aligned} T_{\text{sun}} &= \left( \frac{q_{\text{sol}}}{\sigma} \right)^{1/4} \left( \frac{S_{ES}}{R_S} \right)^{1/2} \\ &= \left( \frac{1367 \text{ W/m}^2}{5.670 \times 10^{-8} \text{ W/m}^2\text{K}^4} \right)^{1/4} \left( \frac{1.496 \times 10^{11}}{6.96 \times 10^8} \right)^{1/2} \end{aligned}$$

$$\boxed{T_{\text{sun}} = 5777 \text{ K}}$$

---

- 1.6 A rocket in space may be approximated as a black cylinder of length  $L = 20$  m and diameter  $D = 2$  m. It flies past the sun at a distance of 140 million km such that the cylinder axis is perpendicular to the sun's rays. Assuming that (i) the sun is a blackbody at 5777 K and (ii) the cylinder has a high conductivity (i.e., is essentially isothermal), what is the temperature of the rocket? (Radius of sun  $R_S = 696,000$  km; neglect radiation from earth and the stars).

**Solution**

The total energy emitted from the sun  $Q = 4\pi R_S^2 \sigma T_{\text{sun}}^4$  goes equally into all directions, so that the flux arriving at the rocket a distance  $S_{RS}$  away from the sun is

$$q_R = Q/4\pi S_{RS}^2 = \sigma T_{\text{sun}}^4 \left( \frac{R_S}{S_{RS}} \right)^2 = \text{flux/unit projected area of rocket}$$

$$\text{Energy emitted} = A_R \sigma T_R^4 = (2\pi R^2 + 2\pi RL) \sigma T_R^4 = 2\pi R(R + L) \sigma T_R^4$$

$$= \text{Energy absorbed} = A_p q_R = 2RL \sigma T_{\text{sun}}^4 \left( \frac{R_S}{S_{RS}} \right)^2$$

$$T_R^4 = \frac{2RL}{2\pi R(R + L)} T_{\text{sun}}^4 \left( \frac{R_S}{S_{RS}} \right)^2 = \frac{1}{\pi} \frac{20}{1 + 20} (5777 \text{ K})^4 \left( \frac{6.96 \times 10^5}{140 \times 10^6} \right)^2$$

$$T_R = 302 \text{ K.}$$


---

- 1.7 A black sphere of very high conductivity (i.e., isothermal) is orbiting earth. What is its temperature? (Consider the sun but neglect radiation from the earth and the stars). What would be the temperature of the sphere if it were coated with a material that behaves like a black body for wavelengths between  $0.4 \mu\text{m}$  and  $3 \mu\text{m}$ , but does not absorb and emit at other wavelengths?

**Solution**

Making an energy balance on the sphere

(a)

$$\begin{aligned} Q_{\text{absorbed}} &= Q_{\text{emitted}} \\ Q_{\text{absorbed}} &= q_{\text{sol}} A_{\text{proj}} = q_{\text{sol}} \pi R^2 \\ Q_{\text{emitted}} &= \sigma T^4 A = \sigma T^4 4\pi R^2 \end{aligned}$$

Thus

$$T = \left( \frac{q_{\text{sol}}}{4\sigma} \right)^{1/4} = \left( \frac{1367 \text{ W/m}^2}{4 \times 5.670 \times 10^{-8} \text{ W/m}^2 \text{K}^4} \right)^{1/4}$$

$$\boxed{T = 279 \text{ K} = 6^\circ \text{C}}$$

(b) If absorption and emission takes place only over the wavelength interval  $0.4 \mu\text{m} < \lambda < 3 \mu\text{m}$ , both  $Q_{\text{abs}}$  and  $Q_{\text{em}}$  will be reduced. Since the sphere is spectrally black, we have

$$Q_{\text{em}} = 4\pi R^2 \int_{0.4 \mu\text{m}}^{3 \mu\text{m}} E_{b\lambda} d\lambda = 4\pi R^2 \sigma T^4 [f(3 \mu\text{m} \times T) - f(0.4 \mu\text{m} \times T)]$$

Solar emission is black, i.e.,  $q_{\text{sol}} \propto E_{b\lambda}(T_{\text{sun}})$ , or

$$\frac{q_{\text{sol},\lambda}}{q_{\text{sol}}} = \frac{E_{b\lambda}(T_{\text{sun}})}{\sigma T_{\text{sun}}^4},$$

and

$$\begin{aligned} Q_{\text{abs}} &= \pi R^2 \int_{0.4 \mu\text{m}}^{3 \mu\text{m}} q_{\text{sol},\lambda} d\lambda = \pi R^2 \frac{q_{\text{sol}}}{\sigma T_{\text{sun}}^4} \int_{0.4 \mu\text{m}}^{3 \mu\text{m}} E_{b\lambda}(T_{\text{sun}}) d\lambda \\ &= \pi R^2 q_{\text{sol}} [f(3 \mu\text{m} \times T_{\text{sun}}) - f(0.4 \mu\text{m} \times T_{\text{sun}})] \end{aligned}$$

Thus,

$$\begin{aligned} 4\sigma T^4 [f(3 \mu\text{m} T) - f(0.4 \mu\text{m} T)] &= q_{\text{sol}} [f(3 \mu\text{m} T_{\text{sun}}) - f(0.4 \mu\text{m} T_{\text{sun}})] \\ &= 1367 \text{ W/m}^2 [f(17,331) - f(2311)] \end{aligned}$$

$$\begin{aligned} T^4 [f(3 \mu\text{m} T) - f(0.4 \mu\text{m} T)] &= \frac{1367}{4 \times 5.670 \times 10^{-8}} (0.9788 - 0.1222) \\ &= 5.1630 \times 10^9 \text{ K}^4 \end{aligned}$$

This nonlinear relation must be solved by iteration, leading to  $T \simeq 600 \text{ K} (< 601 \text{ K})$

$$600^4 \times [0.03934 - 0] = 5.0985 \times 10^9$$

$$\boxed{T = 600 \text{ K}}$$



- 1.8 A 100 Watt light bulb may be considered to be an isothermal black sphere at a certain temperature. If the light flux (i.e., visible light,  $0.4 \mu\text{m} < \lambda < 0.7 \mu\text{m}$ ) impinging on the floor directly (2.5 m) below the bulb is  $42.6 \text{ mW/m}^2$ , what is the light bulb's effective temperature? What is its efficiency?

**Solution**

The total heat rate (100 W) leaving the light bulb will go at equal per-unit-area amounts through any (hypothetical) sphere around the bulb. Take a sphere which has the spot on the floor on its surface (radius  $h = 2.5 \text{ m}$ )

$$q_{\text{floor,visible}} = q_{\text{fv}} = [f(\lambda_2 T) - f(\lambda_1 T)] \frac{Q_{\text{bulb}}}{4\pi h^2}$$

$$f(\lambda_2 T) - f(\lambda_1 T) = 4\pi h^2 q_{\text{fv}} / Q_{\text{bulb}} = 4\pi (2.5)^2 \text{m}^2 (42.6 \times 10^{-3} \frac{\text{W}}{\text{m}^2}) / 100 \text{ W}$$

$$= 0.03346$$

By trial and error:

$$T = 2500 \text{ K} \rightarrow \lambda_1 T = 0.4 \mu\text{m} \times 2500 \text{ K} = 1000 \mu\text{m K}$$

$$\lambda_2 T = 0.7 \mu\text{m} \times 2500 \text{ K} = 1750 \mu\text{m K}$$

$$f(\lambda_2 T) - f(\lambda_1 T) = 0.03369 - 0.00032 = 0.03337$$

$T = 2500 \text{ K}; \quad \eta = 3.34\% \quad \text{is converted into visible light}$
--

The answers for  $f(\lambda_1 T)$  and  $f(\lambda_2 T)$  are the same whether Appendix C or program planck.exe are employed, since no interpolation is necessary.

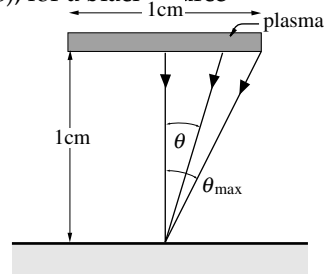
---

- 1.9 When a metallic surface is irradiated with a highly concentrated laser beam, a plume of plasma (i.e., a gas consisting of ions and free electrons) is formed above the surface that absorbs the laser's energy, often blocking it from reaching the surface. Assume that a plasma of 1 cm diameter is located 1 cm above the surface, and that the plasma behaves like a blackbody at 20,000 K. Based on these assumptions calculate the radiative heat flux and the total radiation pressure on the metal directly under the center of the plasma.

**Solution**

Radiation emitted from the plasma ( $\approx$  black disk) hits the spot below it generating an incoming radiative heat flux and a radiative pressure. From equation (1.36), for a black source

$$\begin{aligned} q_{\text{in}} &= \int_{2\pi} I_b \cos \theta d\Omega \\ &= I_b \int_{\Omega_{\text{plasma}}} \cos \theta d\Omega \\ &= 2\pi I_b \int_0^{\theta_{\text{max}}} \cos \theta \sin \theta d\theta \\ &= E_b \sin^2 \theta_{\text{max}} = E_b \times \frac{1}{5} = \frac{5.670 \times 10^{-8} \times 20,000^4 \text{ W/m}^2}{5} \end{aligned}$$



$$q_{\text{in}} = 1.814 \times 10^9 \text{ W/m}^2 = 181.4 \text{ kW/cm}^2$$

This should be compared to the maximum flux at the center of an unobstructed laser beam, which may be several MW/cm<sup>2</sup>.

The radiation pressure is found similarly, from equation (1.42) as

$$\begin{aligned} p &= \frac{2\pi I_b}{c} \int_0^{\theta_{\text{max}}} \cos^2 \theta \sin \theta d\theta = \frac{2E_b}{3c} (1 - \cos^2 \theta_{\text{max}}) = \frac{2E_b}{3c} \left[ 1 - \left(\frac{4}{5}\right)^{3/2} \right] \\ &= \frac{2}{3} \frac{5.670 \times 10^{-8} \times 20,000^4 \text{ W/m}^2}{3 \times 10^8 \text{ m/s}} [1 - 0.7155] = 5.735 \frac{\text{Ws}}{\text{m}^3} = 5.735 \frac{\text{N}}{\text{m}^2} \end{aligned}$$

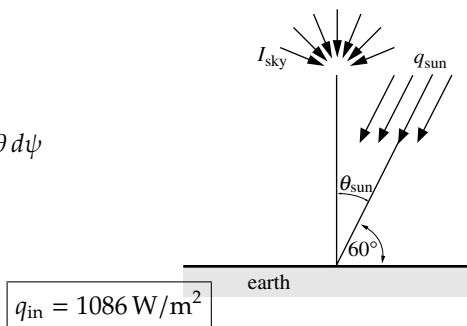
$$p = 5.735 \text{ N/m}^2$$

- 1.10** Solar energy incident on the surface of the earth may be broken into two parts: A direct component (traveling unimpeded through the atmosphere) and a sky component (reaching the surface after being scattered by the atmosphere). On a clear day the direct solar heat flux has been determined as  $q_{\text{sun}} = 1000 \text{ W/m}^2$  (per unit area normal to the rays), while the intensity of the sky component has been found to be diffuse (i.e., the intensity of the sky radiation hitting the surface is the same for all directions) and  $I_{\text{sky}} = 70 \text{ W/m}^2\text{sr}$ . Determine the total solar irradiation onto earth's surface if the sun is located  $60^\circ$  above the horizon (i.e.,  $30^\circ$  from the normal).

**Solution**

Since earth's surface is tilted away from the sun, less energy per unit surface area hits earth than is carried by the sunshine (per unit area normal to the rays), as seen from Fig. 1-8 (by a factor of  $\cos \theta_{\text{sun}} = \cos 30^\circ$ ). Thus from equation (1.36)

$$\begin{aligned} q_{\text{in}} &= q_{\text{sun}} \cos \theta_{\text{sun}} + \int_{2\pi} I_{\text{sky}} \cos \theta \, d\Omega \\ &= q_{\text{sun}} \cos \theta_{\text{sun}} + \int_0^{2\pi} \int_0^{\pi/2} \cos \theta \sin \theta \, d\theta \, d\psi \\ &= q_{\text{sun}} \cos \theta_{\text{sun}} + \pi I_{\text{sky}} \\ &= 1000 \times \cos 30^\circ + \pi \times 70 = 1086 \text{ W/m}^2 \end{aligned}$$



- 1.11 A window (consisting of a vertical sheet of glass) is exposed to direct sunshine at a strength of  $1000 \text{ W/m}^2$ . The window is pointing due south, while the sun is in the southwest,  $30^\circ$  above the horizon. Estimate the amount of solar energy that (i) penetrates into the building, (ii) is absorbed by the window, and (iii) is reflected by the window. The window is made of (a) plain glass, (b) tinted glass, whose radiative properties may be approximated by

$$\begin{aligned} \rho_\lambda &= 0.08 \quad \text{for all wavelengths (both glasses),} \\ \tau_\lambda &= \begin{cases} 0.90 & \text{for } 0.35 \mu\text{m} < \lambda < 2.7 \mu\text{m} \\ 0 & \text{for all other wavelengths} \end{cases} \quad \text{(plain glass)} \\ \tau_\lambda &= \begin{cases} 0.90 & \text{for } 0.5 \mu\text{m} < \lambda < 1.4 \mu\text{m} \\ 0 & \text{for all other wavelengths} \end{cases} \quad \text{(tinted glass).} \end{aligned}$$

(c) By what fraction is the amount of visible light ( $0.4 \mu\text{m} < \lambda < 0.7 \mu\text{m}$ ) reduced, if tinted rather than plain glass is used? How would you modify this statement in the light of Fig. 1-11?

### Solution

If we want to determine how much sunshine penetrates through the window (for the entire window area, or per unit window area), we need to determine the angle between a normal to the window ( $\hat{n}$ ) and a vector pointing to the sun ( $\hat{s}$ ), or  $\cos \beta = \hat{n} \cdot \hat{s}$ . From geometric relations it follows that  $\cos \beta = \cos 30^\circ \times \cos 45^\circ = 0.6124$ . Thus sunshine on the window, per unit window area, is  $q_{\text{in}} = 612.4 \text{ W/m}^2$ . Of that the fraction 0.08 is reflected, i.e.,

$$q_{\text{ref}} = 0.08 \times 612.4 = 49.0 \text{ W/m}^2 \text{ of window area.}$$

(a) Plain glass: The transmitted sunshine may be calculated as

$$\begin{aligned} q_{\text{trans}} &= \int_0^\infty \tau_\lambda q_{\text{in},\lambda} d\lambda = 0.90 \int_{0.35 \mu\text{m}}^{2.7 \mu\text{m}} q_{\text{in},\lambda} d\lambda \\ &= 0.90 q_{\text{in}} [f(2.7 \mu\text{m } T_{\text{sun}}) - f(0.35 \mu\text{m } T_{\text{sun}})] \\ &= 0.90 \times 612.4 \text{ W/m}^2 [f(15,598 \mu\text{m K}) - f(2022 \mu\text{m K})] \\ &= 0.90 \times 612.4 \times (0.9720 - 0.0702) = 497.0 \text{ W/m}^2 \end{aligned}$$

It follows that

$$q_{\text{abs}} = q_{\text{in}} - q_{\text{ref}} - q_{\text{trans}} = 612.4 - 49.0 - 497.4 = 66.0 \text{ W/m}^2$$

(b) Tinted glass: Similarly,

$$\begin{aligned} q_{\text{trans}} &= 0.90 \times q_{\text{in}} [f(1.4 \mu\text{m} \times 5777 \text{ K}) - f(0.5 \mu\text{m} \times 5777 \text{ K})] \\ &= 0.90 \times 612.4 \times [f(8088) - f(2889)] \text{ W/m}^2 \\ &= 0.90 \times 612.4 \times (0.8597 - 0.2481) = 337.1 \text{ W/m}^2, \end{aligned}$$

$$q_{\text{trans}} = 337.1 \text{ W/m}^2$$

i.e., heat gain is reduced by  $160 \text{ W/m}^2$  (or 32%).

(c) The tinted glass loses some visible light, since it is not transmissive for  $0.4 \mu\text{m} < \lambda < 0.5 \mu\text{m}$ . The fractional reduction is

$$\begin{aligned} \text{fractional reduction} &= \frac{0.90 q_{\text{in}} [f(0.5 \mu\text{m } T_{\text{sun}}) - f(0.4 \mu\text{m } T_{\text{sun}})]}{0.90 q_{\text{in}} [f(0.7 \mu\text{m } T_{\text{sun}}) - f(0.4 \mu\text{m } T_{\text{sun}})]} \\ &= \frac{f(2889) - f(2311)}{f(4044) - f(2311)} = \frac{0.2481 - 0.1222}{0.4888 - 0.1222} \end{aligned}$$

$$\text{fractional reduction} = 34.3\%$$

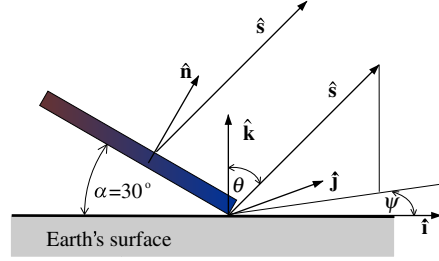
Therefore, the tinted glass appears to cause an equivalent loss of visible light. However, Fig. 1-11 shows that the human eye is not very responsive to wavelengths below  $\approx 0.5 \mu\text{m}$ , so that the actual reduction of visible light is considerably less.

- 1.12 On an overcast day the directional behavior of the intensity of solar radiation reaching the surface of the earth after being scattered by the atmosphere may be approximated as  $I_{\text{sky}}(\theta) = I_{\text{sky}}(\theta = 0) \cos \theta$ , where  $\theta$  is measured from the surface normal. For a day with  $I_{\text{sky}}(0) = 100 \text{ W/m}^2\text{sr}$  determine the solar irradiation hitting a solar collector, if the collector is (a) horizontal, (b) tilted from the horizontal by  $30^\circ$ . Neglect radiation from the earth's surface hitting the collector (by emission or reflection).

**Solution**

(a) For a horizontal collector the solar irradiation is readily determined from equation (1.36) as

$$\begin{aligned} q_{\text{in}} &= \int_0^{2\pi} \int_0^{\pi/2} (I_0 \cos \theta) \cos \theta \sin \theta d\theta d\psi \\ &= 2\pi I_0 \int_0^{\pi/2} \cos^2 \theta \sin \theta d\theta = \frac{2\pi}{3} I_0 = \frac{2\pi}{3} \times 100 \end{aligned}$$



$$q_{\text{in}} = 209.4 \text{ W/m}^2$$

(b) To evaluate  $q_{\text{in}}$  for a tilted collector, equation (1.36) becomes

$$q_{\text{in}} = \int_{\hat{\mathbf{n}} \cdot \hat{\mathbf{s}} > 0} I_0 (\hat{\mathbf{k}} \cdot \hat{\mathbf{s}}) (\hat{\mathbf{n}} \cdot \hat{\mathbf{s}}) d\Omega,$$

where  $\hat{\mathbf{k}} \cdot \hat{\mathbf{s}} = \cos \theta$  gives the variation of sky intensity with sky polar angle  $\theta$ , while  $\hat{\mathbf{n}} \cdot \hat{\mathbf{s}} = \cos \theta'$  is the cosine of the angle between the surface normal and a unit vector pointing into the sky,  $\hat{\mathbf{s}}$ . This unit vector may be expressed in terms of  $\hat{\mathbf{i}}, \hat{\mathbf{j}}, \hat{\mathbf{k}}$  (unit vectors for an earth-bound coordinate system), with

$$\hat{\mathbf{i}}' = \cos \alpha \hat{\mathbf{i}} - \sin \alpha \hat{\mathbf{k}}, \quad \hat{\mathbf{j}}' = \hat{\mathbf{j}}, \quad \hat{\mathbf{n}} = \sin \alpha \hat{\mathbf{i}} + \cos \alpha \hat{\mathbf{k}},$$

as

$$\begin{aligned} \hat{\mathbf{s}} &= \sin \theta \cos \psi \hat{\mathbf{i}} + \sin \theta \sin \psi \hat{\mathbf{j}} + \cos \theta \hat{\mathbf{k}} \\ &= \sin \theta' \cos \psi' \hat{\mathbf{i}}' + \sin \theta' \sin \psi' \hat{\mathbf{j}}' + \cos \theta' \hat{\mathbf{n}}. \end{aligned}$$

Substituting for  $\hat{\mathbf{i}}', \hat{\mathbf{j}}'$  and  $\hat{\mathbf{n}}, \hat{\mathbf{s}}(\theta', \psi')$  becomes

$$\begin{aligned} \hat{\mathbf{s}} &= (\sin \theta' \cos \psi \cos \alpha + \cos \theta' \sin \alpha) \hat{\mathbf{i}} + \sin \theta' \sin \psi \hat{\mathbf{j}} \\ &\quad + (\cos \theta' \cos \alpha - \sin \theta' \cos \psi' \sin \alpha) \hat{\mathbf{k}}. \end{aligned}$$

Equation (1.36) may be evaluated by evaluating  $\hat{\mathbf{k}} \cdot \hat{\mathbf{s}}$  in collector coordinates (i.e., integrating over  $\theta'$  and  $\psi'$ ), or by determining  $\hat{\mathbf{n}} \cdot \hat{\mathbf{s}}$  in global coordinates (integrating over  $\theta$  and  $\psi$ ). Choosing the former, one obtains

$$q_{\text{in}} = \int_{\substack{\hat{\mathbf{k}} \cdot \hat{\mathbf{s}} > 0 \\ \hat{\mathbf{n}} \cdot \hat{\mathbf{s}} > 0}} I_0 (\cos \theta' \cos \alpha - \sin \theta' \cos \psi' \sin \alpha) \cos \theta' \sin \theta' d\theta' d\psi'$$

The integration limits imply that only directions above the collector ( $0 < \theta < \pi/2$ ) and above the horizontal

$$\hat{\mathbf{k}} \cdot \hat{\mathbf{s}} = \cos \theta = \cos \theta' \cos \alpha - \sin \theta' \cos \psi' \sin \alpha > 0$$

are to be considered. Solving the last expression for  $\cos \psi'$  yields

$$\cos \psi' < \cot \alpha \cot \theta',$$

and using symmetry

$$q_{\text{in}} = 2I_0 \int_0^{\pi/2} \int_{\cos^{-1}(\cos \alpha \cos \theta')}^{\pi} (\cos \theta' \cos \alpha - \sin \theta' \cos \psi' \sin \alpha) \times \cos \theta' \sin \theta' d\psi' d\theta'.$$

Any radiation from earth's surface hits the collector with a polar angle of  $\theta' > 60^\circ$ , making a negligible contribution to  $q_{\text{in}}$ . Thus, as a first approximation, the lower limit for  $\psi'$  may be replaced by 0, such that

$$\begin{aligned} q_{\text{in}} &= 2I_b \int_0^{\pi/2} \int_0^{\pi} (\cos \theta' \cos \alpha - \sin \theta' \cos \psi' \sin \alpha) \cos \theta' \sin \theta' d\psi' d\theta' \\ &= \frac{2\pi}{3} I_0 \cos \alpha = \frac{2\pi}{3} \times 100 \times \cos 30^\circ = 181.4 \text{ W/m}^2. \end{aligned}$$

$$\boxed{q_{\text{in}} = 181.4 \text{ W/m}^2}$$

This number is a little bit too low because the additionally considered radiation from the earth has a  $\hat{\mathbf{k}} \cdot \hat{\mathbf{s}} = \cos \theta < 0$ .

---

- 1.13** A 100 W light bulb is rated to have a total light output of 1750 lm. Assuming the light bulb to consist of a small, black, radiating body (the light filament) enclosed in a glass envelope (with a transmittance  $\tau_g = 0.9$  throughout the visible wavelengths), estimate the filament's temperature. If the filament has an emittance of  $\epsilon_f = 0.7$  (constant for all wavelengths and directions), how does it affect its temperature?

**Solution**

The total heat rate leaving the light bulb by radiation (going equally into all directions) is

$$Q_{\text{bulb}} = \tau Q_{\text{fil}} = \tau(A_{\text{fil}} \epsilon_{\text{fil}} \sigma T_{\text{fil}}^4).$$

Thus the radiative heat flux on a large, hypothetical sphere of radius  $R$  surrounding the bulb is

$$q(R) = \frac{Q_{\text{bulb}}}{A_{\text{sphere}}} = \frac{A_{\text{fil}}}{A_{\text{sphere}}} \tau \epsilon_{\text{fil}} \pi I_b(T_{\text{fil}}) = I(R) d\Omega_{\text{fil}}$$

where  $I(R)$  indicates that the flux at  $R$  is coming from a very small solid angle normal to the surface and is, therefore, simply a normal intensity multiplied by the small solid angle.

From equation (1.47) the luminous flux at  $R$  is

$$q_{\text{lum}}(R) = L d\Omega_{\text{fil}} = 286 \frac{\text{lm}}{\text{W}} \int_{0.4 \mu\text{m}}^{0.7 \mu\text{m}} I_{\lambda}(R) d\lambda d\Omega_{\text{fil}}$$

With gray (i.e., constant) values for  $\epsilon_{\text{fil}}$  and  $\tau$  (at least over the visible wavelengths), this makes  $I_{\lambda}(R) \propto I_{b\lambda}(T_{\text{fil}})$ , and

$$\begin{aligned} q_{\text{lum}}(R) &= 286 \frac{\text{lm}}{\text{W}} I(R) d\Omega_{\text{fil}} [f(0.7 \mu\text{m } T_{\text{fil}}) - f(0.4 \mu\text{m } T_{\text{fil}})]. \\ Q_{\text{lum}} &= q_{\text{lum}}(R) A_{\text{sphere}} \\ &= 286 \frac{\text{lm}}{\text{W}} A_{\text{fil}} \tau \epsilon_{\text{fil}} \pi I_b(T_{\text{fil}}) [f(0.7 \mu\text{m } T_{\text{fil}}) - f(0.4 \mu\text{m } T_{\text{fil}})] \\ &= 286 \frac{\text{lm}}{\text{W}} \pi \tau Q_{\text{fil}} [f(0.7 \mu\text{m } T_{\text{fil}}) - f(0.4 \mu\text{m } T_{\text{fil}})], \end{aligned}$$

where  $Q_{\text{lum}}$  is the total luminous flux leaving the bulb. Thus

$$\begin{aligned} f(0.7 T_{\text{fil}}) - f(0.4 T_{\text{fil}}) &= \frac{Q_{\text{lum}}}{286(\text{lm/W}) \pi \tau Q_{\text{fil}}} = \frac{1750 \text{ lm}}{286(\text{lm/W}) \pi \times 0.9 \times 100 \text{ W}} \\ &= 0.02164. \end{aligned}$$

By trial and error, one finds from Appendix C, for  $T_{\text{fil}} \simeq 2320 \text{ K}$

$$f(0.7 \times 2320) - f(0.4 \times 2320) = 0.02165 - 0.00013 = 0.02152.$$

$$\boxed{T_{\text{fil}} \simeq 2320 \text{ K}}$$

This expression does not include the filament emittance:  $\epsilon_f = 0.7$  would leave  $T_{\text{fil}}$  unchanged (however,  $A_{\text{fil}}$  would have to increase by a factor of  $1/0.7 = 1.43$ , in order to emit 100 W of power).

---

- 1.14 A *pyrometer* is a device with which the temperature of a surface may be determined remotely by measuring the radiative energy falling onto a detector. Consider a black detector of  $1 \text{ mm} \times 1 \text{ mm}$  area, that is exposed to a  $1 \text{ cm}^2$  hole in a furnace located a distance of  $1 \text{ m}$  away. The inside of the furnace is at  $1500 \text{ K}$  and the intensity escaping from the hole is essentially blackbody intensity at that temperature. (a) What is the radiative heat rate hitting the detector? (b) Assuming that the pyrometer has been calibrated for the situation in (a), what temperature would the pyrometer indicate if the nonabsorbing gas between furnace and detector were replaced by one with an (average) absorption coefficient of  $\kappa = 0.1 \text{ m}^{-1}$ ?

**Solution**

(a) A total radiative intensity of  $I_b(T_{\text{furnace}})$  leaves the hole, equally into all directions. From the definition of intensity the total heat rate hitting the detector—assuming the detector to be directly opposite the hole—is

$$Q_d = A_{\text{hole}} I_b(T_f) d\Omega_{\text{hole-detector}} = A_{\text{hole}} I_b(T_f) \frac{A_{\text{detector}}}{S_{\text{hd}}^2}$$

$$Q_d = \frac{A_{\text{hole}} \sigma T_f^4 A_{\text{detector}}}{\pi S_{\text{hd}}^2}$$

$$= \frac{1 \text{ cm}^2 \times 5.670 \times 10^{-12} \text{ W/cm}^2 \text{ K}^4 \times 1500^4 \text{ K}^4 \times 1 \text{ mm}^2}{\pi 1 \text{ m}^2}$$

$$Q_d = 9.137 \times 10^{-6} \text{ W} = 9.137 \mu\text{W}$$

(b) The signal would now be attenuated by a factor of  $\exp(-\kappa S_{\text{hd}})$ , or

$$Q_d^* = Q_d \exp(-\kappa S_{\text{hd}}) = 9.137 \mu\text{W} \times \exp(-0.1 \text{ m}^{-1} \times 1 \text{ m})$$

$$= 8.2675 \mu\text{W}$$

Since the calibration is  $Q_d \propto T_f^4$  we have

$$\frac{Q_d}{T_f^4} = \frac{Q_d^*}{T_f^{*4}} \rightarrow T_f^{*4} = \frac{Q_d^*}{Q_d} T_f^4$$

$$T_f^* = \left( \frac{8.2675}{9.137} \right)^{1/4} 1500 = 1463 \text{ K},$$

i.e., the measurement would be wrong by  $37 \text{ K}$ .

---



**1.15** Consider a pyrometer, which also has a detector area of  $1\text{mm} \times 1\text{mm}$ , which is black in the wavelength range  $1.0\ \mu\text{m} \leq \lambda \leq 1.2\ \mu\text{m}$ , and perfectly reflecting elsewhere. In front of the detector is a focussing lens ( $f = 10\ \text{cm}$ ) of diameter  $D = 2\ \text{cm}$ , and transmissivity of  $\tau_l = 0.9$  (around  $1\ \mu\text{m}$ ). In order to measure the temperature inside a furnace, the pyrometer is focussed onto a hot black surface inside the furnace, a distance of  $1\ \text{m}$  away from the lens.

(a) How large a spot on the furnace wall does the detector see? (Remember that geometric optics dictates

$$\frac{1}{f} = \frac{1}{u} + \frac{1}{v}; \quad M = \frac{h(\text{detector size})}{H(\text{spot size})} = \frac{v}{u},$$

where  $u = 1\text{m}$  is the distance from lens to furnace wall, and  $v$  is the distance from lens to detector.)

- (b) If the temperature of the furnace wall is  $1200\ \text{K}$ , how much energy is absorbed by the detector per unit time?
- (c) It turns out the furnace wall is not really black, but has an emittance of  $\epsilon = 0.7$  (around  $1\ \mu\text{m}$ ). Assuming there is no radiation reflected from the furnace surface reaching the detector, what is the true surface temperature for the pyrometer reading of case (b)?
- (d) To measure higher temperatures pyrometers are outfitted with filters. If a  $\tau_f = 0.7$  filter is placed in front of the lens, what furnace temperature would provide the same pyrometer reading as case (b)?

### Solution

(a) From geometric optics

$$\frac{1}{v} = \frac{1}{f} - \frac{1}{u} = \frac{1}{10\text{cm}} - \frac{1}{100\text{cm}} = \frac{9}{100\text{cm}}; \quad v = 11.1\text{cm}$$

$$H = h \frac{u}{v} = 1\text{mm} \times \frac{100}{11.1} = 9\text{mm}.$$

Thus, the spot seen by the pyrometer is  $9\text{mm} \times 9\text{mm}$  in size.

(b) Energy leaving spot, intercepted by detector (or, by conservation of energy, energy intercepted by detector, coming from spot) is

$$Q_d = I_{b12}(T)A_H\Omega_{Hl}\tau_l = I_{d12}A_h\Omega_{hl},$$

where  $I_{b12}(T) = \int_{\lambda_1}^{\lambda_2} I_{b\lambda}(T)d\lambda$  is emitted intensity from the spot on the furnace wall,  $I_{d12}$  is intensity absorbed by the detector, and  $\Omega_{Hl}$  and  $\Omega_{hl}$  are the solid angles with which the lens is seen from  $H$  and  $h$ , respectively. Since  $H$  and  $h$  are small compared to  $f$  and  $D = 2R$ , we simply evaluate the solid angles from the center of spot  $H$  and detector  $h$ :

$$\Omega_{Hl} \approx \frac{\pi R^2}{u^2}; \quad \Omega_{hl} = \frac{\pi R^2}{v^2},$$

and

$$A_H\Omega_{Hl} = \pi R^2 \left(\frac{H}{u}\right)^2 = \pi R^2 \left(\frac{h}{v}\right)^2 = A_h\Omega_{hl} = \pi 1\text{cm}^2 \left(\frac{.9}{100}\right)^2 = 2.545 \times 10^{-4}\text{cm}^2$$

Therefore,  $I_{b12}(T)\tau_l = I_{d12}$ , i.e., intensity hitting detector is the *same* as emitted from furnace, except for the attenuation through the lens: total energy is concentrated on a smaller spot by increasing the solid angle. Finally,

$$\begin{aligned} I_{b12} &= \frac{\sigma T^4}{\pi} [f(\lambda_2 T) - f(\lambda_1 T)] = \frac{5.67 \times 10^{-8} \times 1200^4}{\pi} \frac{\text{W}}{\text{m}^2} \underbrace{[f(1440)]}_{0.00961} - \underbrace{[f(1200)]}_{0.00213} \\ &= 280 \frac{\text{W}}{\text{m}^2} \\ &\approx I_{b\lambda}(1.1\ \mu\text{m}, 1200\text{k})\Delta\lambda = (E_{b\lambda}/T^5)(T^5/\pi)\Delta\lambda = 1.7228 \times 10^{-12} \times \frac{1200^5}{\pi} 0.2 \frac{\text{W}}{\text{m}^2} \\ &= 273 \frac{\text{W}}{\text{m}^2} \end{aligned}$$

and

$$Q_d = 280 \frac{\text{W}}{\text{m}^2} 2.545 \times 10^{-8} \text{m}^2 \times 0.9 = 6.41 \mu\text{W}$$

(c) The energy hitting detector remains the same and, therefore, so does the intensity emitted from the spot:

$$\epsilon I_{b12}(T_a)(\text{actual}) = I_{b12}(T_p = 1200\text{K})(\text{perceived})$$

or, if we assume the blackbody intensity over the detector range can be approximated by the value at  $1.1 \mu\text{m}$ ,

$$\frac{\epsilon}{e^{C_2/\lambda T_a} - 1} \simeq \frac{1}{e^{C_2/\lambda T_p} - 1},$$

leading to

$$\begin{aligned} T_a &= \frac{C_2}{\lambda} \left/ \ln\{1 + \epsilon[e^{C_2/\lambda T_p} - 1]\} \right. \\ &= \frac{14,388 \mu\text{mK}}{1.1 \mu\text{m}} \left/ \ln\{1 + 0.7[e^{14,388/1.1 \times 1200} - 1]\} \right. \end{aligned}$$

or

$$T_a = 1241\text{K}.$$

At these wavelengths Wien's law holds almost exactly, i.e., we may drop the two "1"s from the above equation, and

$$T_a \simeq \frac{C_2}{\lambda} \left/ \ln(\epsilon e^{C_2/\lambda T_p}) \right. = \frac{C_2/\lambda}{\frac{C_2}{\lambda T_p} + \ln \epsilon} = \frac{T_p}{1 + \frac{\lambda T_p}{C_2} \ln \epsilon}$$

which again leads to 1241k.

(d) Similar to (c) we get  $\tau_f I_{b12}(T_a) = I_{b12}(T_p)$  and, since  $\tau_f = \epsilon_{(c)}$ , the answer is the same, i.e.,

$$T_a = 1241\text{K}.$$

Thus, a much stronger filter is needed to really extend the pyrometer's range.

---